


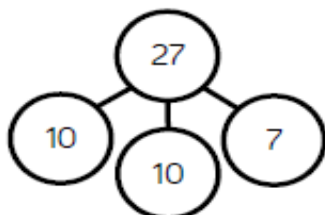

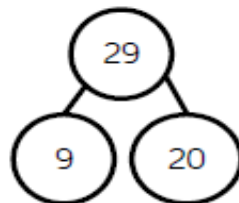

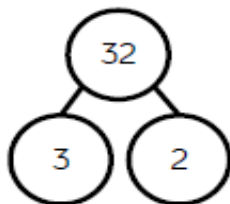
Lesson 2 Challenge Activities:



Sam

Sam would like your help. He wants you to colour in the box which shows the representation of 27.


The children are completing the part whole models.




---



---



---



---



---



---

Are they correct?  
Explain why.